

CALIFORNIA INSTITUTE OF TECHNOLOGY
BioEngineering

Bi 250b

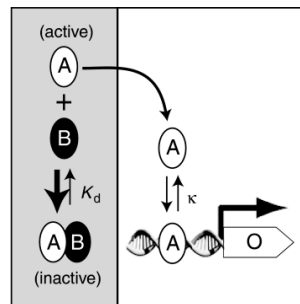
M. Elowitz and R. M. Murray
Winter 2012

Problem Set #2

Issued: 18 Jan 12
Due: 27 Jan 12

- (Based on Alon 4.6) *Shaping the pulse*. Consider a situation where X in an I1-FFL begins to be produced at time $t=0$, so that the level of protein X gradually increases. The input signal S_x and S_y are present throughout.
 - Download “plot.m” and “prob1.m” from the class website and place them in the same folder. Modify “plot.m” to specify values for K_{xz} , K_{xy} , K_{yz} , and β and run the script. (Note: Script will not run unless 3 values for each parameter have been specified). Study the graphs for different values of parameters.

How does the pulse shape generated by the I1-FFL depend on the thresholds K_{xz} , K_{xy} , and K_{yz} , and on β , the production rate of protein X? (i.e. How does increasing or decreasing these parameters change the height or position of the pulse peak, the slope of the rise of the pulse, etc?) Explain qualitatively in a biological context why you would expect changing the parameters to have this effect.
 - Analyze a set of genes Z_1, Z_2, \dots, Z_n , all regulated by the same X and Y in I1-FFLs. Describe the relationship of the thresholds, K_{xz_n} and K_{yz_n} , such that the genes are turned ON in the rising phase of the pulse in a certain temporal order (i.e. Z_1 is turned on, then Z_2 then $Z_3 \dots$) and turned OFF in the declining phase of the pulse with the same order.
 - What would the relationship be if the turn-OFF order is opposite the turn-ON order?
- (based on Buchler, *et al.*, 2009, MSB 5:272) *Protein Sequestration and Ultrasensitivity*. Consider the circuit below. In the circuit, A is a transcriptional activator that binds to a single DNA site with dissociation constant, κ . A activates O in a non-cooperative, Michaelis-Menton fashion. B can bind to A with a dissociation constant of K_D , rendering A inactive.



- We assume that A and B bind stoichiometrically, that is, that the formation of the heterodimer is greatly favored over free A . Write down a mathematical relation that reflects this. With this assumption, qualitatively describe what happens in the case when there is less A than B . What about if there is more A than B ?

- b) Write an expression for the rate of change of O in terms of A , κ , the basal transcription rate (β_0), the activated transcription rate (β), and the degradation rate (γ). What is the steady-state value of O (O_{ss}) in terms of these constants and A_{ss} ?
- c) By using mass conservation, we can find an expression for the amount of free A in terms of A_{TOTAL} , B_{TOTAL} , and K_D . We get that:

$$A = \frac{1}{2} \left(A_{TOTAL} - B_{TOTAL} - K_D + \sqrt{(A_{TOTAL} - B_{TOTAL} - K_D)^2 + 4A_{TOTAL} \cdot K_D} \right)$$

Plot the concentration of O at steady-state as a function of A_{TOTAL} from 0 nM to 10 uM for the following values of B_{TOTAL} : 0 nM, 500 nM, 5000 nM. Use the following constants:

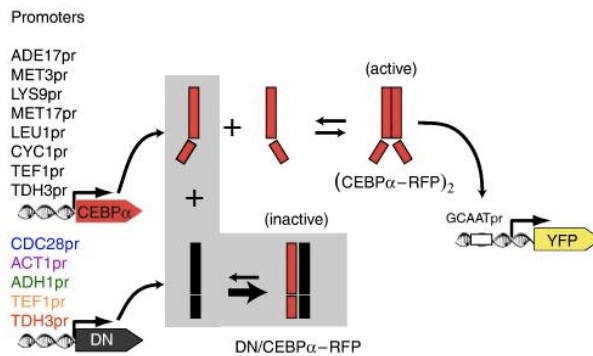
$$\frac{\beta_0}{\gamma} = 1 \text{ nM}$$

$$\frac{\beta}{\gamma} = 100 \text{ nM}$$

$$\kappa = 100 \text{ nM}$$

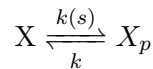
$$K_D = 1 \text{ nM}$$

- d) Describe qualitatively the effect of increasing B regarding the sensitivity of the system. Describe a possible role of protein sequestration in a biological circuit.
- e) In order to test their mathematical hypothesis, Buchler and colleagues implemented the circuit shown below. RFP was fused to $CEBP\alpha$, a transcriptional activator which drove the production of YFP. YFP and RFP levels could then be monitored with flow-cytometry. What species do the YFP and RFP levels relate to in the hypothetical system?



3. *Two component systems, (based on Shinar, et al., 2007, doi: 10.1073/pnas.0706792104)*

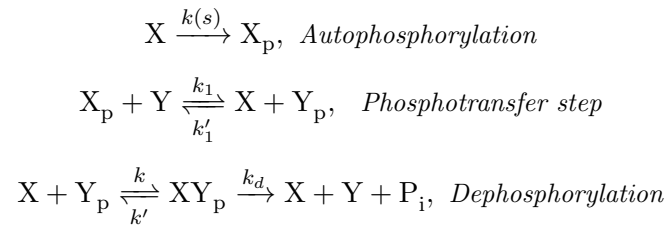
Consider a protein X that undergoes transitions between an active state X_p and an inactive state X .



s is an input signal to the system that affects the activation rate constant $k(s)$, X_p is the output of the system.

- a) Write down an expression for the change in X_p in terms of the activation rate constant $k(s)$, deactivation constant k and inactive protein X .
- b) Find the steady state of the expression found in a). Express the active protein X_p as a function of the activation rate constant $k(s)$, deactivation constant k and total amount of protein $X_T = X_p + X$.
- c) Plot the output as a function of the input s found in b), for different values of $X_T = 0.8, 1, 1.2$ where $k = 2$ and $k(s) = 5s$. Comment on the circuit's robustness with respect to varying protein concentrations by using part b) to reason about it.

Consider a two component phosphorylation system:



s is an input signal to the system that affects the rate of autophosphorylation, $k_a(s), Y_p$ is the output of the system.

- d) *phosphoMainIO.m* plots the output Y_p as a function of the input s . Run *phosphoMainIO.m* and comment on the relation between the input s and the output Y_p and compare it to the simple phosphorylation case.